

Homework
Due 3rd February 2023
We are looking at complements
to 100.

**This week in Maths we have
looked at complements of 100.**

**Can you remember what
complements means?**

**Complements is a number or
quantity of something, especially
that required to make a group
complete.**

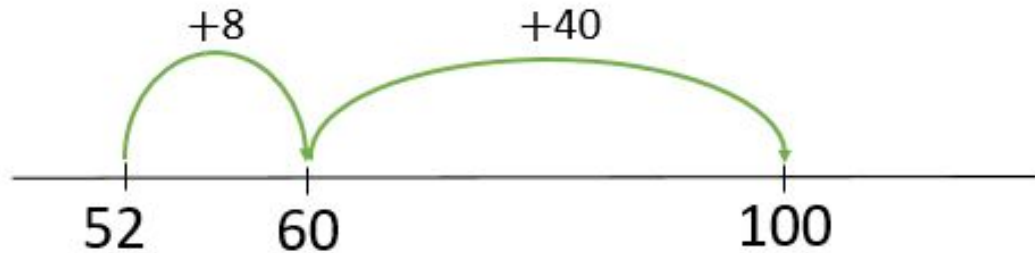
Let's remind ourselves how we find complements.

What is the complement to 100 of 52?



I'm going to use a number line.

$$40 + 8 = 48$$



52 and 48 are complements to 100

We can use our number bonds to 10 to round up to the next ten then use our number bonds to 100 to round up to 100.

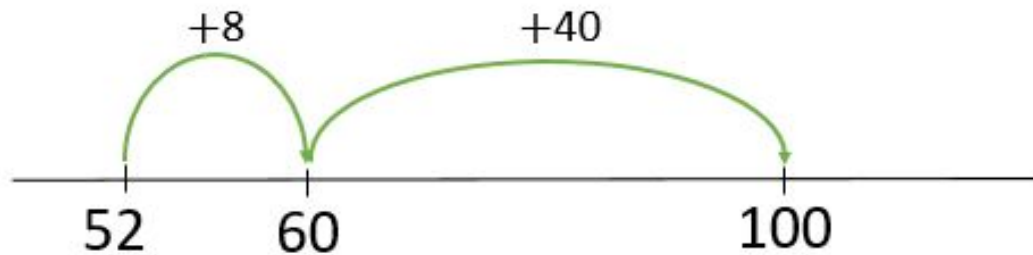


What is the complement to 100 of 52?



I'm going to use a number line.

$$40 + 8 = 48$$



52 and 48 are complements to 100



Sizzling: Use a number line to find the complements of 100.

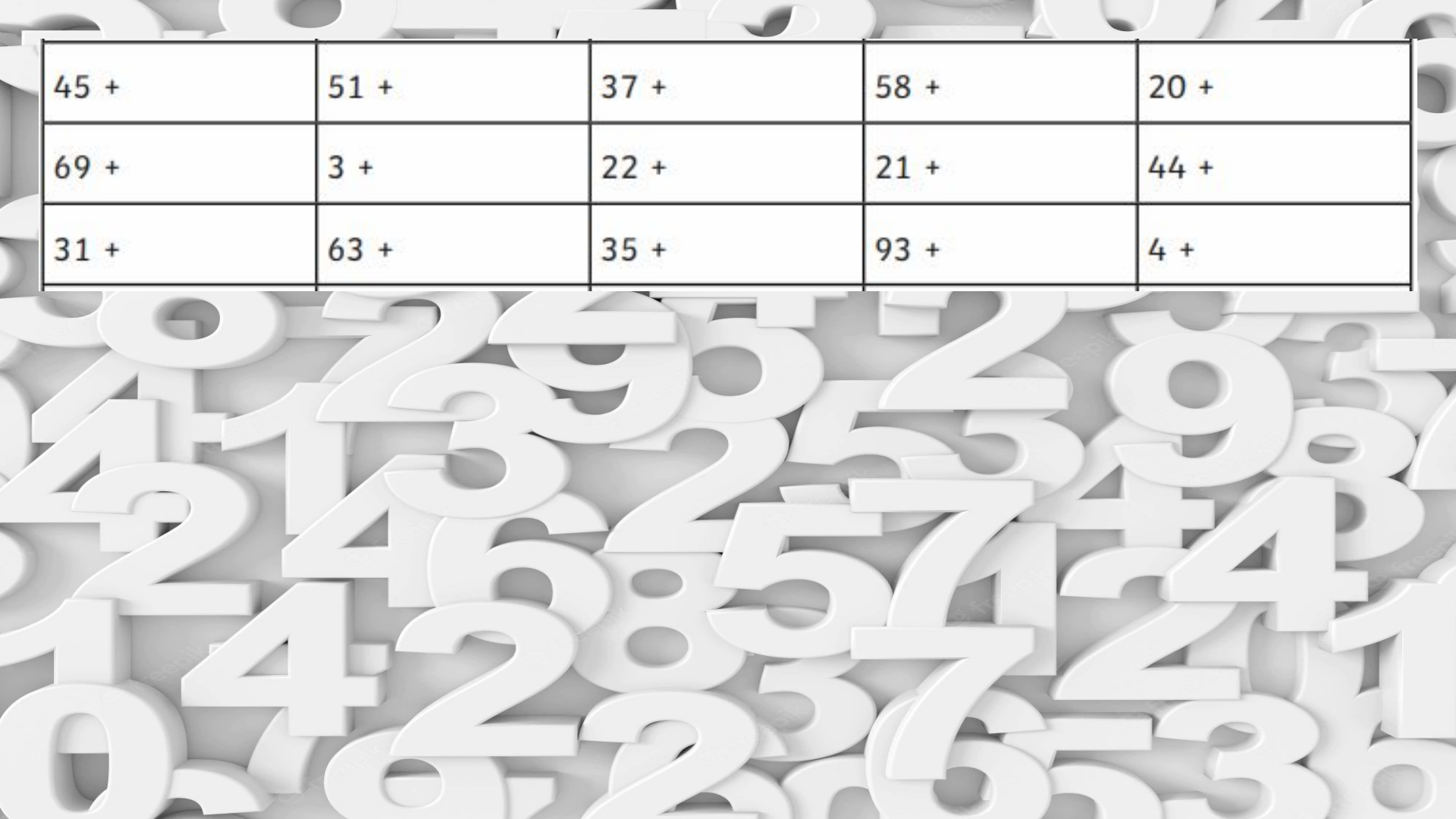


Hot: Find the complements to 100, Can you show your working out.



Scorching: Create a complements to 100 quiz for your adults. Make sure you have the answers written down.

45 +	51 +	37 +	58 +	20 +
69 +	3 +	22 +	21 +	44 +
31 +	63 +	35 +	93 +	4 +



45 +	51 +	37 +	58 +	20 +
69 +	3 +	22 +	21 +	44 +
31 +	63 +	35 +	93 +	4 +